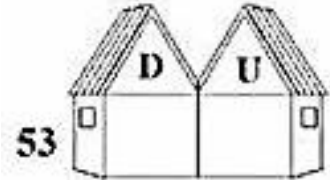
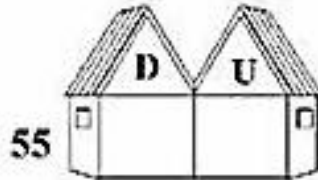
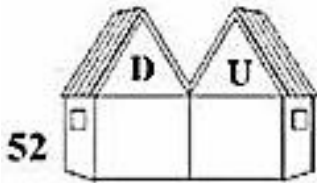
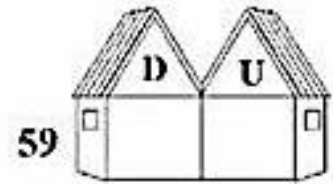
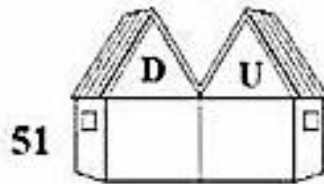
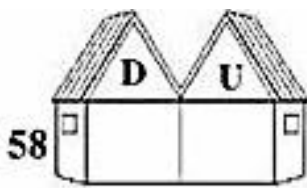




1ª ETAPA
ATIVIDADES DE MATEMÁTICA


REALIZE AS ATIVIDADES DA PÁGINA 318 DO LIVRO.

1) Organize os números no quadro.




2) Complete com a família numérica do 50.

50 _____



3) Agora complete com os números vizinhos.



Meu amor! Você vai longe!